

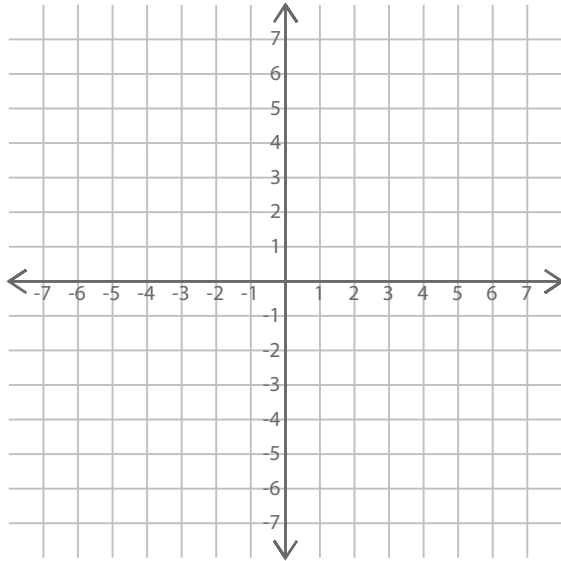


Name : ..... Class : .....

## Plotting and drawing lines

Plot and draw the lines.

1.



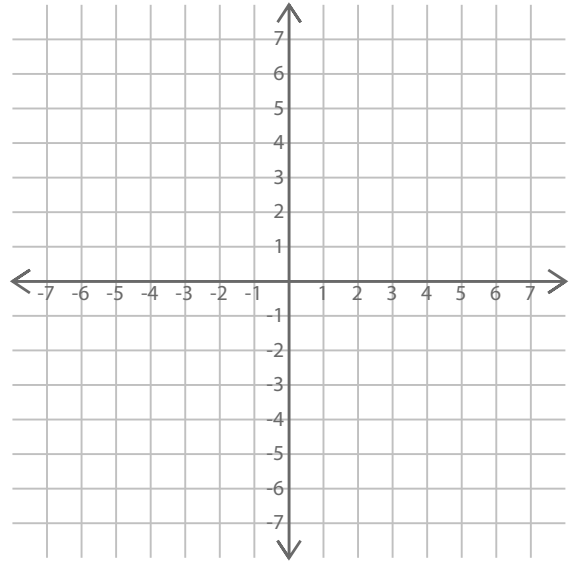
$A = (-3, -3)$

$B = (-1, 3)$

$C = (0, 6)$

$D = (-2, 0)$

2.



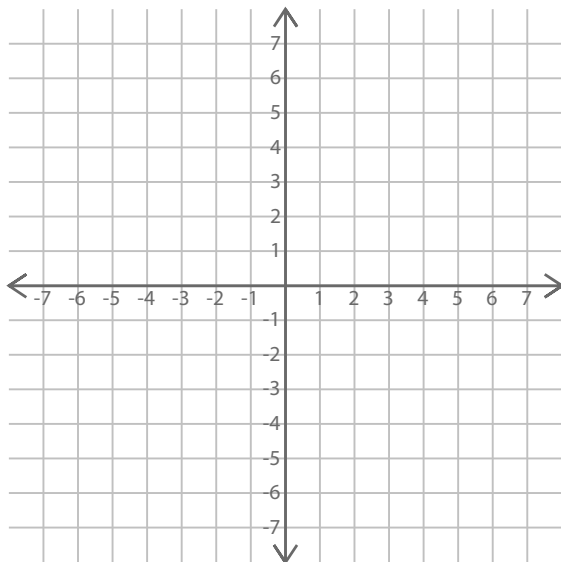
$A = (6, 0)$

$B = (4, -1)$

$C = (-6, -6)$

$D = (2, -2)$

3.



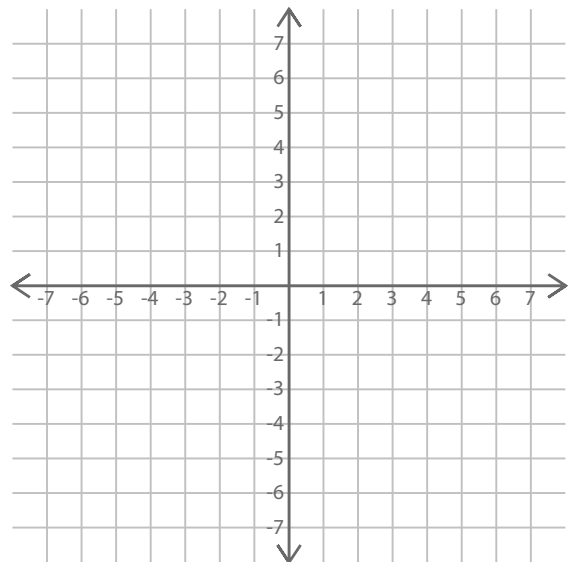
$A = (6, 6)$

$B = (-2, 6)$

$C = (-6, 6)$

$D = (5, 6)$

4.



$A = (-4, 4)$

$B = (0, -4)$

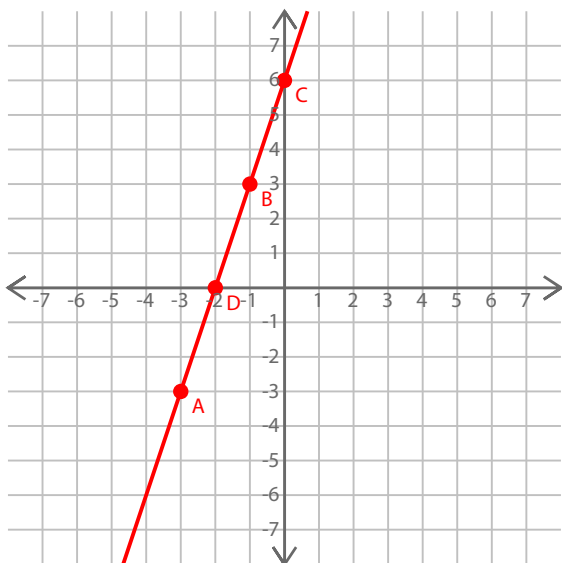
$C = (-5, 6)$

$D = (-1, -2)$

# ANSWER SHEET

Plot and draw the lines.

1.



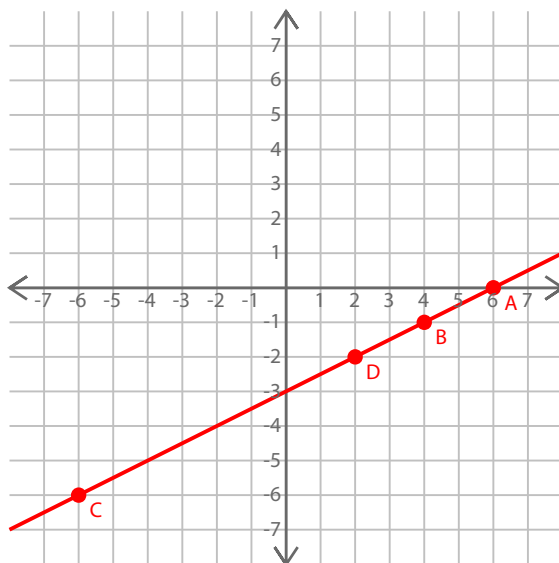
$$A = (-3, -3)$$

$$B = (-1, 3)$$

$$C = (0, 6)$$

$$D = (-2, 0)$$

2.



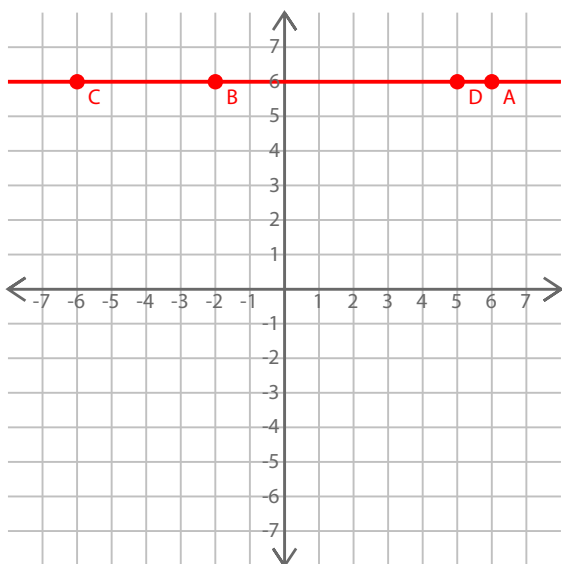
$$A = (6, 0)$$

$$B = (4, -1)$$

$$C = (-6, -6)$$

$$D = (2, -2)$$

3.



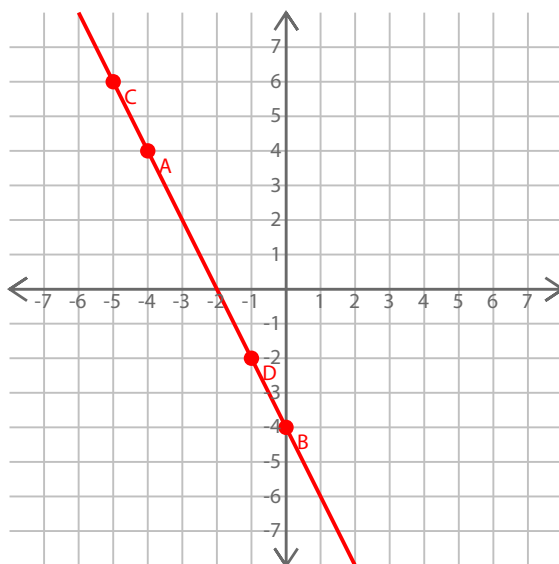
$$A = (6, 6)$$

$$B = (-2, 6)$$

$$C = (-6, 6)$$

$$D = (5, 6)$$

4.



$$A = (-4, 4)$$

$$B = (0, -4)$$

$$C = (-5, 6)$$

$$D = (-1, -2)$$