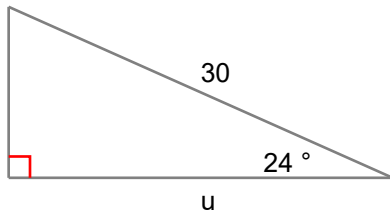


Name : Class :

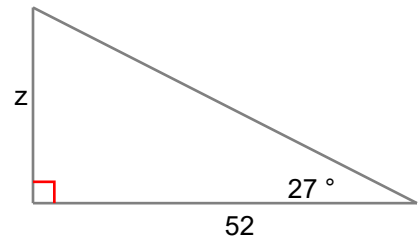
Right triangle problem solving in trigonometry

Find the side indicated by the variable. Round to the nearest tenth.

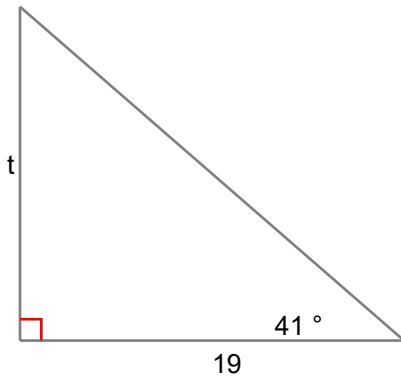
1) $u =$ _____



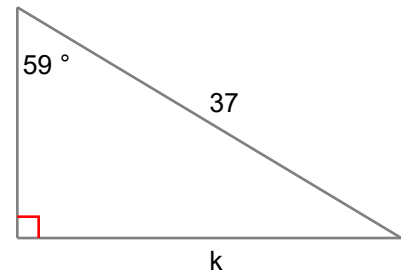
2) $z =$ _____



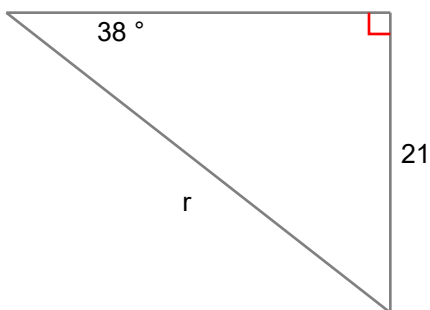
3) $t =$ _____



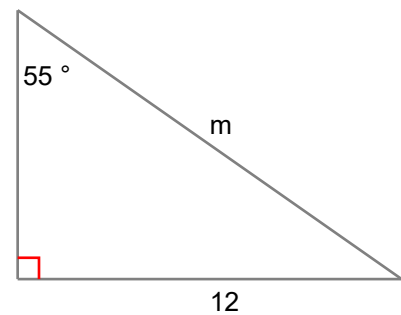
4) $k =$ _____




5) $r =$ _____



6) $m =$ _____



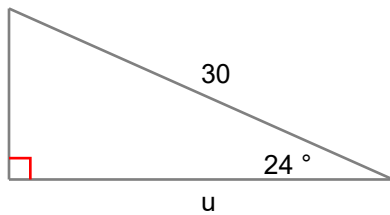


Name : Class :

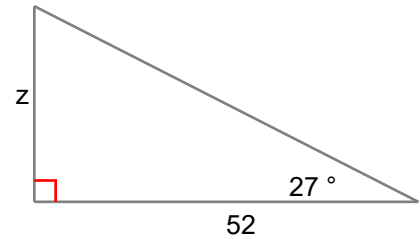
Answers

Find the side indicated by the variable. Round to the nearest tenth.

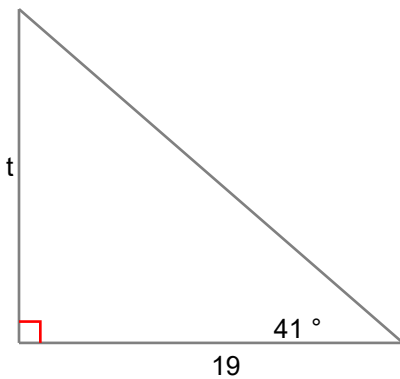
1) $u = \underline{27.4}$



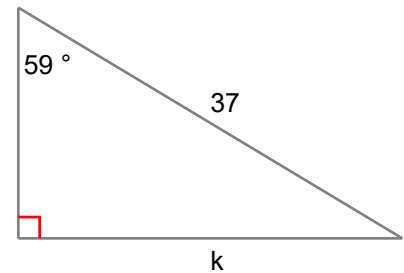
2) $z = \underline{26.5}$



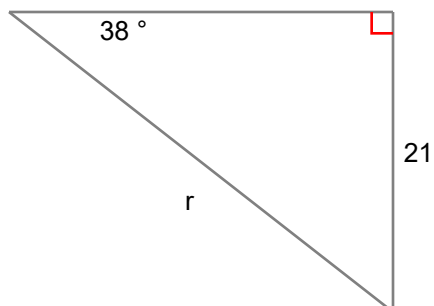
3) $t = \underline{16.5}$



4) $k = \underline{31.7}$



5) $r = \underline{34.1}$



6) $m = \underline{14.6}$

