

Name : ..... Class : .....

## Measuring the lines and writing their length

Measure the lines and write their length in centimeter.

1. \_\_\_\_\_

2. \_\_\_\_\_

3. \_\_\_\_\_

4. \_\_\_\_\_

5. \_\_\_\_\_

6. \_\_\_\_\_

7. \_\_\_\_\_


8. \_\_\_\_\_


9. \_\_\_\_\_


10. \_\_\_\_\_

## ANSWER SHEET

Measure the lines.

1. 12 cm 

2. 9 cm 

3. 8 cm 


4. 16 cm 

5. 3 cm 

6. 17 cm 

7. 10 cm 

8. 13 cm 

9. 6 cm 

10. 15 cm 