



Name : ..... Class : .....

## Classifying and measuring angles

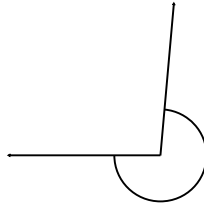
Classify and measure the angles.

1.



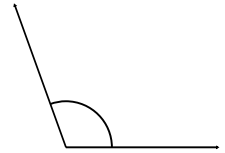
\_\_\_\_\_

2.



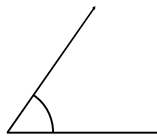
\_\_\_\_\_

3.



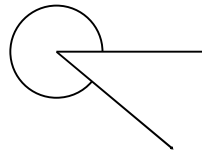
\_\_\_\_\_

4.



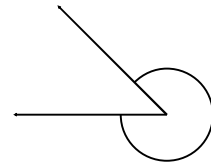
\_\_\_\_\_

5.



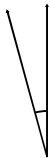
\_\_\_\_\_

6.



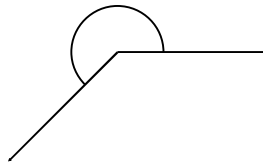
\_\_\_\_\_

7.



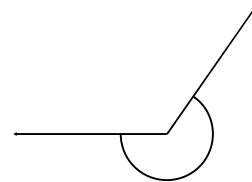
\_\_\_\_\_

8.



\_\_\_\_\_

9.



\_\_\_\_\_

10.



\_\_\_\_\_

# ANSWER SHEET

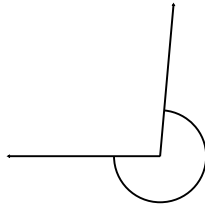
Classify and measure the angles.

1.



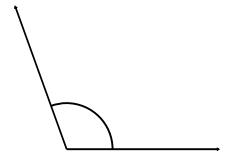
170° Obtuse

2.



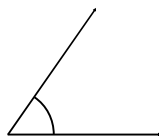
265° Reflex

3.



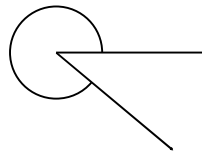
110° Obtuse

4.



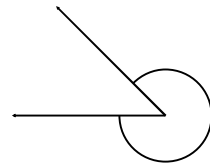
55° Acute

5.



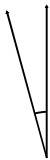
320° Reflex

6.



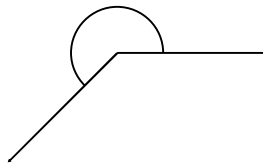
315° Reflex

7.



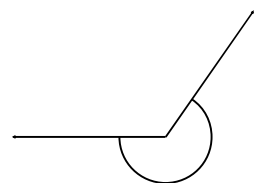
15° Acute

8.



225° Reflex

9.



235° Reflex

10.



35° Acute