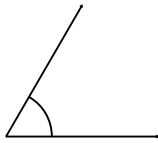


Name : ..... Class : .....

## Calculating circumference and area of circles

Classify and measure the angles.

1.



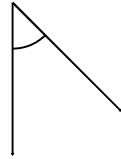
\_\_\_\_\_

2.



\_\_\_\_\_

3.




\_\_\_\_\_

4.



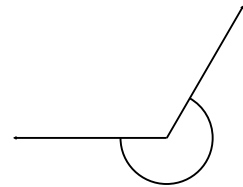
\_\_\_\_\_

5.



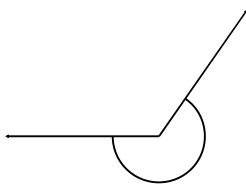
\_\_\_\_\_

6.



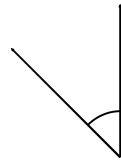
\_\_\_\_\_

7.



\_\_\_\_\_

8.



\_\_\_\_\_

9.



\_\_\_\_\_

10.

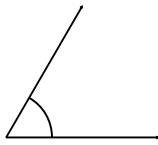


\_\_\_\_\_

# ANSWER SHEET

Classify and measure the angles.

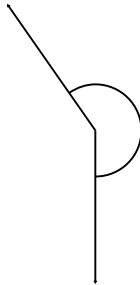
1.



Acute

---

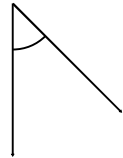
2.



Reflex

---

3.



Acute

---

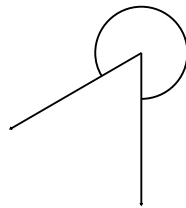
4.



Obtuse

---

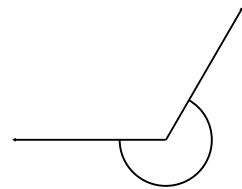
5.



Reflex

---

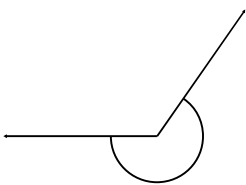
6.



Reflex

---

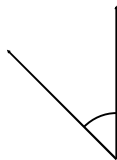
7.



Reflex

---

8.



Acute

---

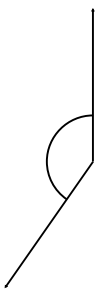
9.



Obtuse

---

10.



Obtuse

---