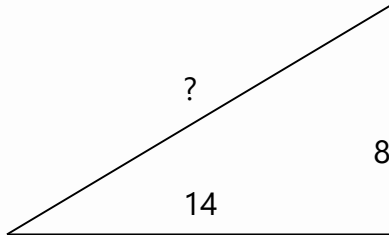


Name : ..... Class : .....

## Pythagorean Theorem

Find the length of the side.

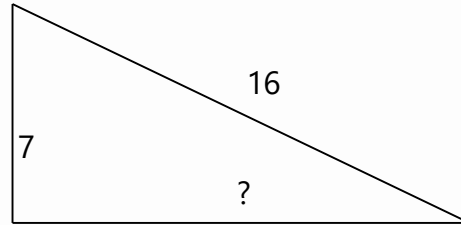
1.



$S = 16.125$

---

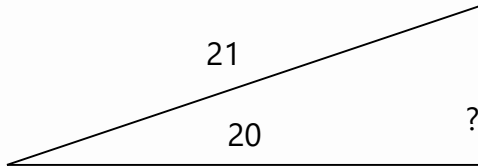
2.



$S = 14.387$

---

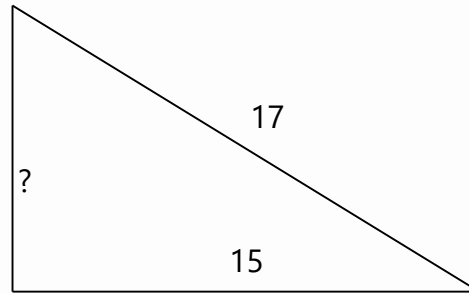
3.



$S = 6.403$

---

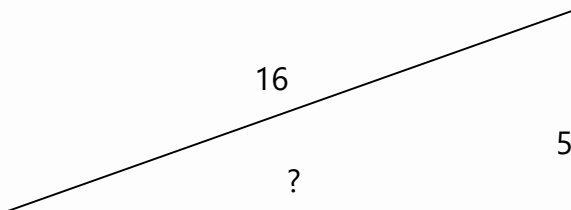
4.



$S = 8$

---

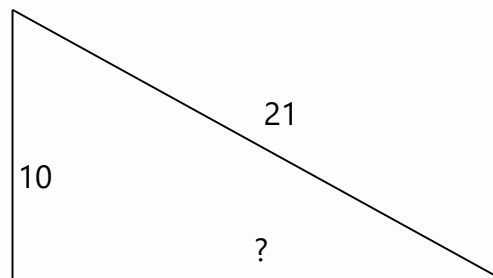
5.



$S = 15.199$

---

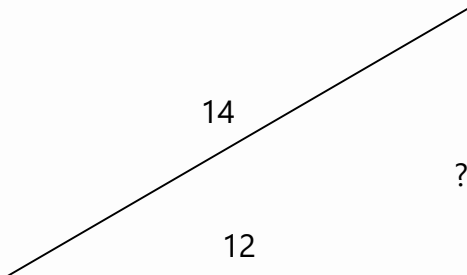
6.



$S = 18.466$

---

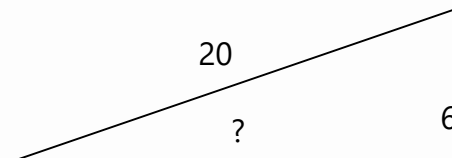
7.



$S = 7.211$

---

8.



$S = 19.079$

---