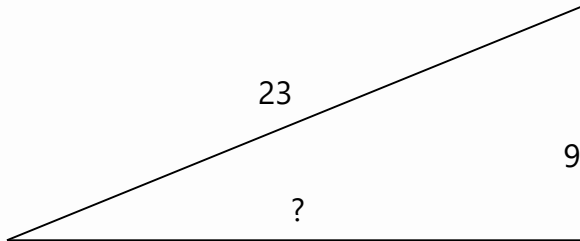


Name : ..... Class : .....

## Pythagorean Theorem

Find the length of the side.

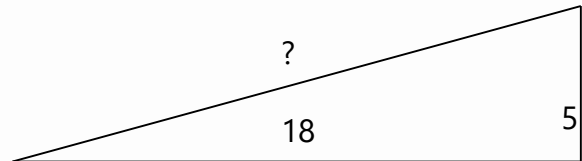
1.



---

$$S = 21.166$$

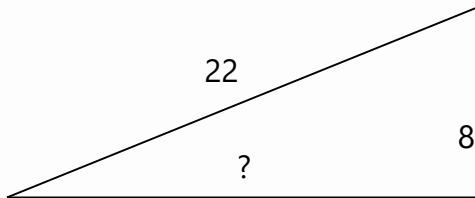
2.



---

$$S = 18.682$$

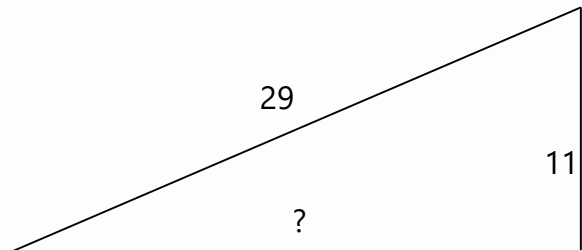
3.



---

$$S = 20.494$$

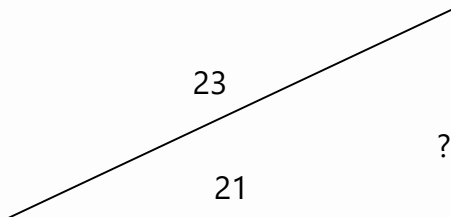
4.



---

$$S = 26.833$$

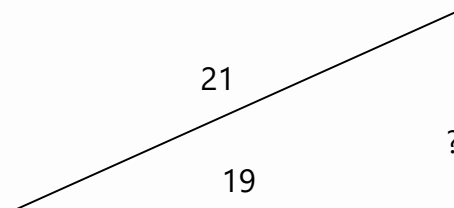
5.



---

$$S = 9.381$$

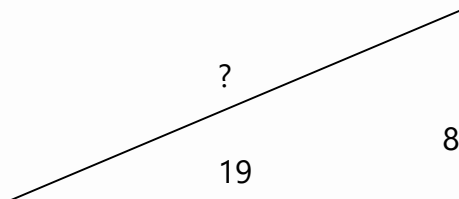
6.



---

$$S = 8.944$$

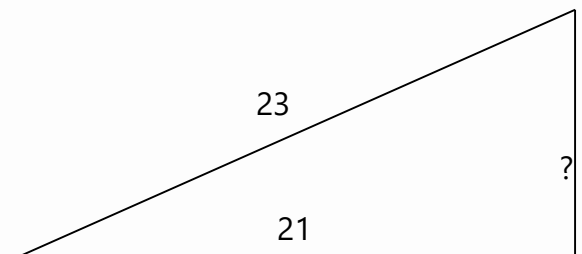
7.



---

$$S = 20.616$$

8.



---

$$S = 9.381$$