





Name : Class :


Identification of fractions


Identify the fraction of the figure that is colored in blue.


1.  = _____

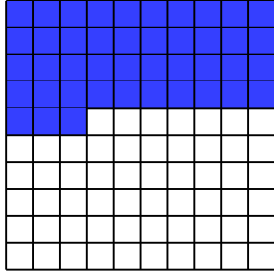
2.  = _____

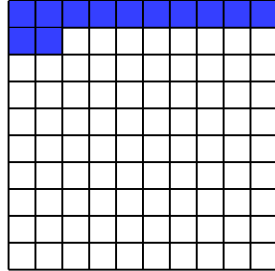
3.  = _____

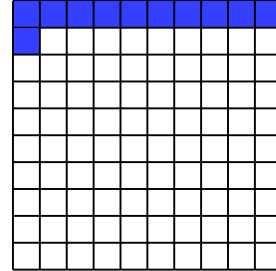
4.  = _____

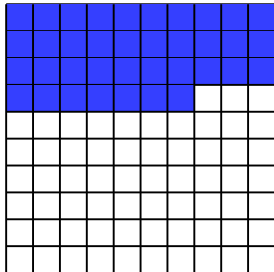
5.  = _____

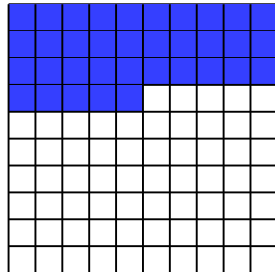
6.  = _____


7.  = _____

8.  = _____

9.  = _____

10.  = _____


11.  = _____


12.  = _____


ANSWER SHEET


Color the fraction.


1.  = $\frac{1}{2}$ _____

2.  = $\frac{2}{3}$ _____

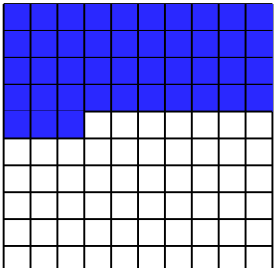
3.  = $\frac{1}{2}$ _____

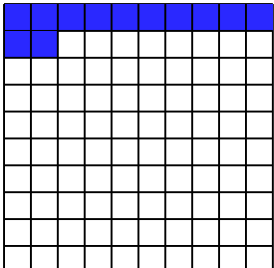
4.  = $\frac{1}{4}$ _____

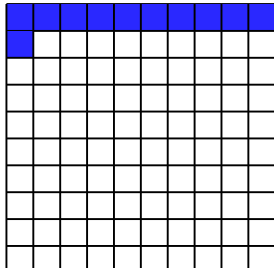
5.  = $\frac{1}{2}$ _____


6.  = $\frac{5}{6}$ _____


Color the fraction.


7.  = $\frac{43}{100}$ _____

8.  = $\frac{3}{25}$ _____

9.  = $\frac{11}{100}$ _____

10.  = $\frac{37}{100}$ _____

11.  = $\frac{7}{20}$ _____

12.  = $\frac{9}{10}$ _____